

MCA (Revised)

Term-End Examination

December, 2009

15316

MCS-033 : ADVANCED DISCRETE
MATHEMATICS

Time : 2 hours

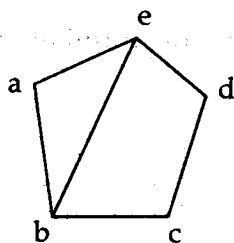
Maximum Marks : 50

Note : Question no. 1 is compulsory. Attempt any three questions from the rest.

1. (a) Determine the number of subsets of a set of n elements, $n \geq 0$. 4

- (b) The number of vertices of odd degree in a graph is always even. 3

- (c) What is the complement of the given graph 2



- (d) Solve the recurrence relation 4

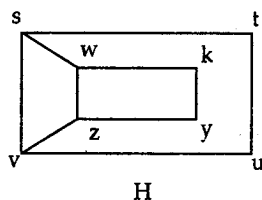
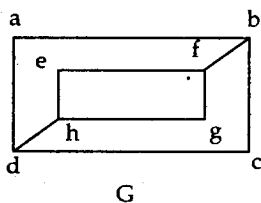
$$a_n - 2a_{n-1} - 3a_{n-2} = 0, n \geq 2 \text{ with}$$

$$a_0 = 3 \text{ and } a_1 = 1$$

(e) Show that a complete graph K_n is planar if $n \leq 4$. 4

(f) Let $f(n) = 5f(n/2) + 3$ and $f(1) = 7$. Find $f(2^k)$ where k is a positive integer. Also estimate $f(n)$ if f is an increasing function. 3

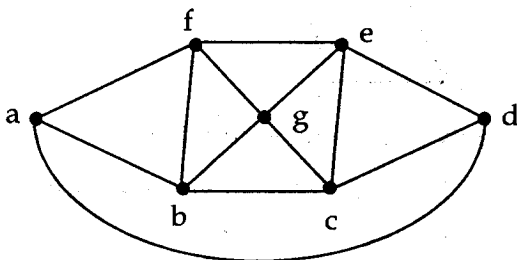
2. (a) Determine whether the graphs are isomorphic. 4



(b) Solve the recurrence relation 4

$$S_r - 4S_{r-1} + 4S_{r-2} = (1+r)2^r$$

(c) What is the chromatic number of the following graph. 2

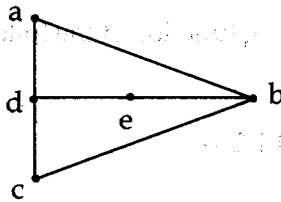


3. (a) Find the order and degree of the following recurrence relations. Also find whether they are homogeneous or non homogeneous ? 4

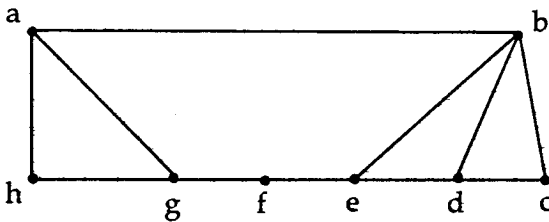
(i) $a_n = 3a_{n-1} + n^2$

(ii) $S_n = S_{n-1}^2 + S_{n-2} S_{n-3} S_{n-4}$

- (b) Show that the graph given below does not contain a Hamiltonian cycle. 3



- (c) Whether the following graph contains Euler circuit a : 3



4. (a) Solve the following recurrence relation using generating function. 5

$$a_n - 9a_{n-1} + 20a_{n-2} = 0 \text{ for } n \geq 2,$$

$$a_0 = -3 \text{ and } a_1 = -10$$

- (b) What is the largest number of vertices in a graph with 35 edges if all vertices are of degree at least 3 ? 5

5. (a) Suppose a tree has n_1 vertices of degree 1, 2 vertices of degree 2, 4 vertices of degree 3 and 3 vertices of degree 4, find n_1 . 3

- (b) Find the solution of 5

$$\sqrt{a_n} - 5\sqrt{a_{n-1}} + 6\sqrt{a_{n-2}} = 0, n \geq 2$$

where $a_0 = 4$ and $a_1 = 25$

- (c) Find the generating function of the following function. 2

$$a_r = 2r + 3, r = 0, 1, 2, \dots$$

- o O o -